

DAY 2 Group Exercise

Exercise:

4) Culvert Design Exercise 4

Culvert Design Exercise 4

Problem: A hydrological analysis was completed for a basin above a proposed roadway and culvert crossing on SR 530. The analysis found that the 25-year flow event was 300 cfs and the 100-year flow event was 390 cfs. In the vicinity of the round culvert, the preferable roadway profile would place the centerline at elevation 1,530 feet, about 10 feet higher than the existing channel bottom. The tailwater depth was found to be 5 feet during the 25-year flow event and 5.5 feet during the 100-year flow event. Also, there are no fish passage concerns at this location. Assume that the culvert will be 100 ft long and will match the existing channel slope of 0.005 ft/ft (0.5%).

Determine the culvert size, and calculate the controlling headwater elevation and corresponding outlet velocity for both the 25- and 100-year events.

Culvert Design Exercise 4

Assumptions:

- Culvert will be circular and concrete
- Headwater to diameter ratio will be \leq or $=$ 1.25 for the 25-year flow
- Culvert end will be left projecting out of the fill since the culvert ends will be out of the clear zone

Culvert Design Exercise 4

Question: Where do I begin? What's the next step?



Where to start?

1. Use WSDOT Hydraulics Manual Figure 3-3.6B Culvert Hydraulic Calculations Form to document the culvert design
 - a) Work in groups to figure out next steps!
 - b) Use the Nomographs packet!**

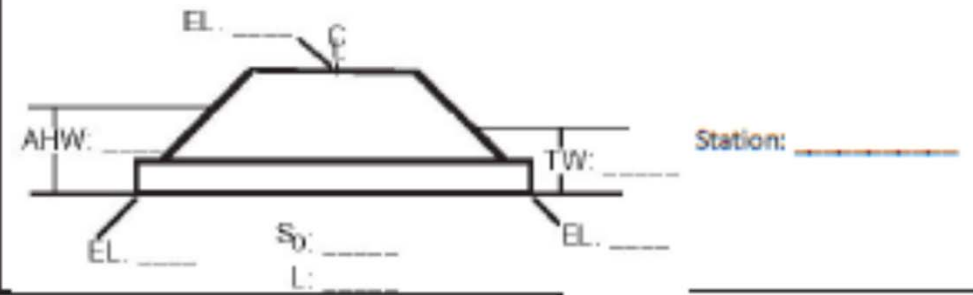
Project: _____
 SR: _____

Designer: _____
 Date: _____

Hydrologic and Channel Information

Q₁: _____ TW₁: _____
 Q₂: _____ TW₂: _____
 Q₃: _____ TW₃: _____

Sketch



Culvert Type	Q	Size	Headwater Computations										Cont. HW	Outlet Vel.	Comments
			Inlet Control		Outlet Control										
			$\frac{HW}{D}$	HW	k_e	d_c	$\frac{d_c + D}{2}$	h_o	H	$L S_o$	HW				

Summary and recommendations:

Culvert Hydraulic Calculations Form
Figure 3-3.6b
 (WSDOT Form 235-006)

Culvert Design Exercise 4

STEPS TO SUCCESS!!!!

- 1) Fill out the culvert design form HM 3-3.6B
- 2) Use the 25-year storm coefficients and values
- 3) Determine the headwater elevation based on inlet control
- 4) Determine the headwater elevation based on outlet control
- 5) The higher of the 2 headwaters values will be controlling the culvert
- 6) Use the corresponding inlet or outlet control velocity equations to determine the outlet velocity and outlet protection

Culvert Design Exercise 4

STEP BY STEP

SOLUTION

Culvert Design Exercise 4

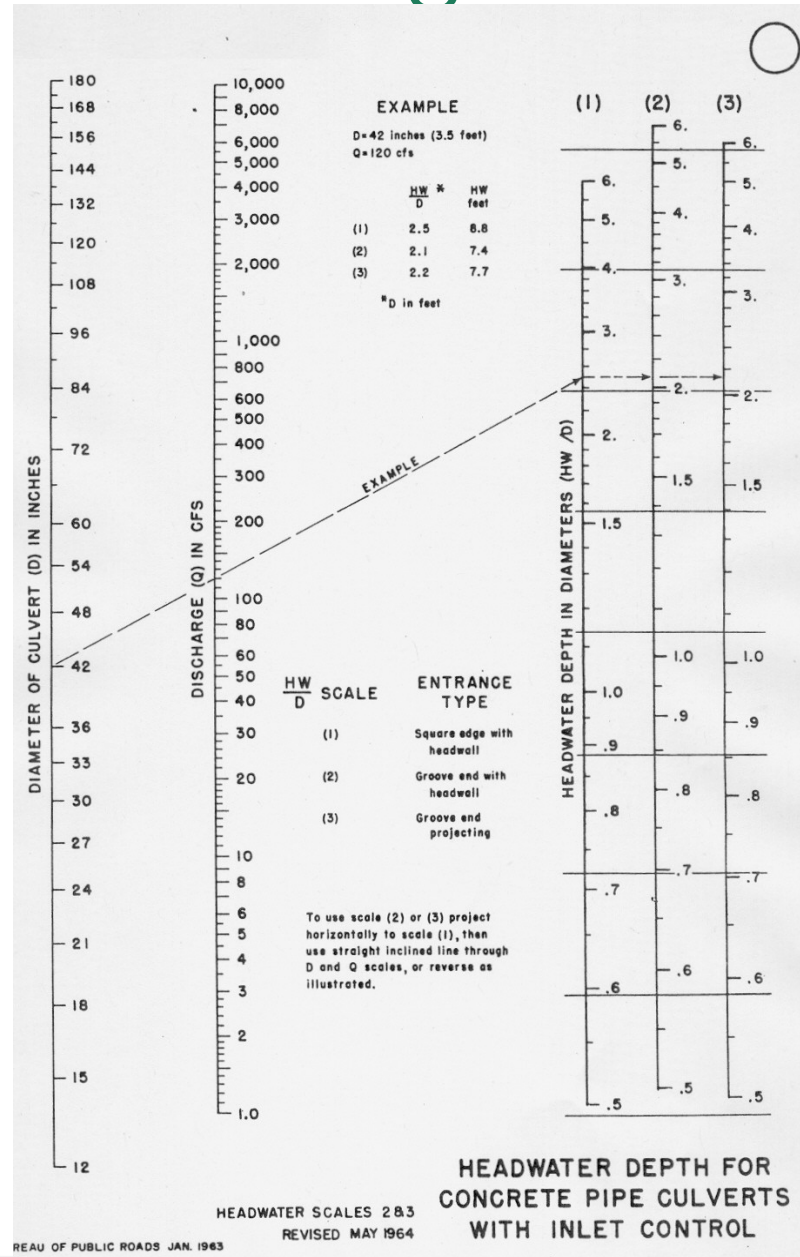
1. Fill out HM 3-3.6B
2. Culvert type = “round”
3. $Q_{25} = 300$ cfs (given in problem statement)
4. To determine the culvert size, use Figure 3-3.4.2A “Concrete Pipe Inlet Control Nomograph”
 - a) We know we want a HW/D of 1.25 or less so we assume a $HW/D = 1.25$
 - b) Entrance type = Groove end projecting based on assumptions so use (3) column

Culvert Design Exercise 4

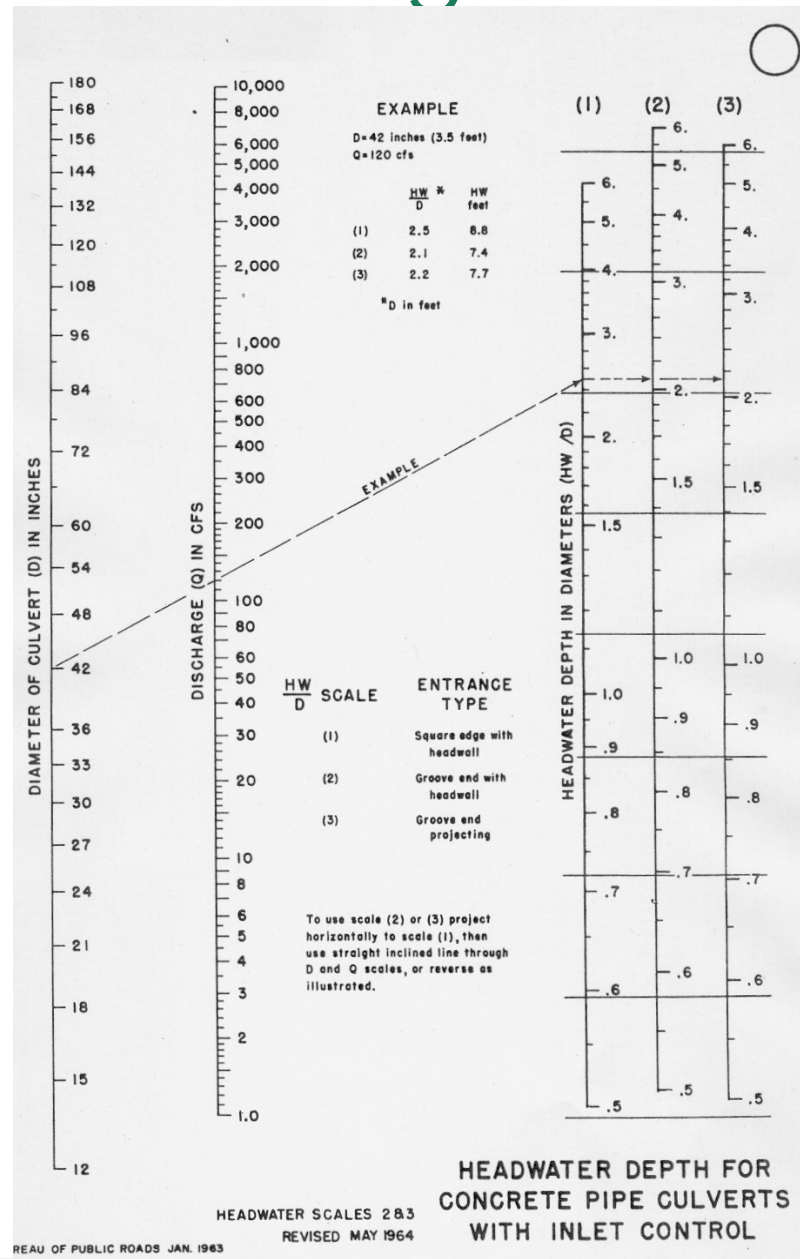
- c) Draw horizontal line from 1.25 across to the left and stop on the (1) line (on 1.38)
- d) Draw a straight line from that point through $Q = 300$ cfs and stop on the Diameter of Culvert line at about 74 inches.
- e) Round up to the next culvert size = 84 inches
- f) From 84 inches, draw a straight line through $Q = 300$ cfs and stop on the (1) line (on 1.05)
- g) Draw a horizontal line across to (3) to show a $HW/D = 1.0$

Culvert Design Exercise 4

Diameter
= about
74" so
round up
to 84"



Culvert Design Exercise 4



Using and 84" diameter culvert, we get an HW/d of 1.0

Culvert Design Exercise 4

- h) On Figure 3-3.6B, list Size = “84 inches”
- i) $HW/D = “1.0”$;
- j) $HW = 1.0 \times 84/12 = “7.0 \text{ feet}”$

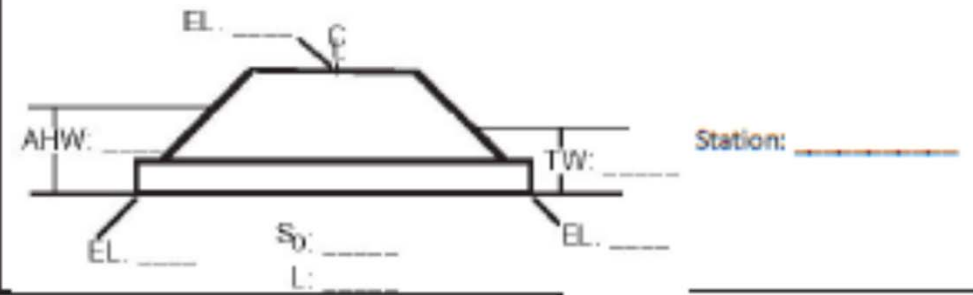
Project: _____
 SR: _____

Designer: _____
 Date: _____

Hydrologic and Channel Information

Q₁: _____ TW₁: _____
 Q₂: _____ TW₂: _____
 Q₃: _____ TW₃: _____

Sketch



Culvert Type	Q	Size	Headwater Computations										Cont. HW	Outlet Vel.	Comments
			Inlet Control		Outlet Control										
			$\frac{HW}{D}$	HW	k_e	d_c	$\frac{d_c + D}{2}$	h_o	H	$L S_o$	HW				

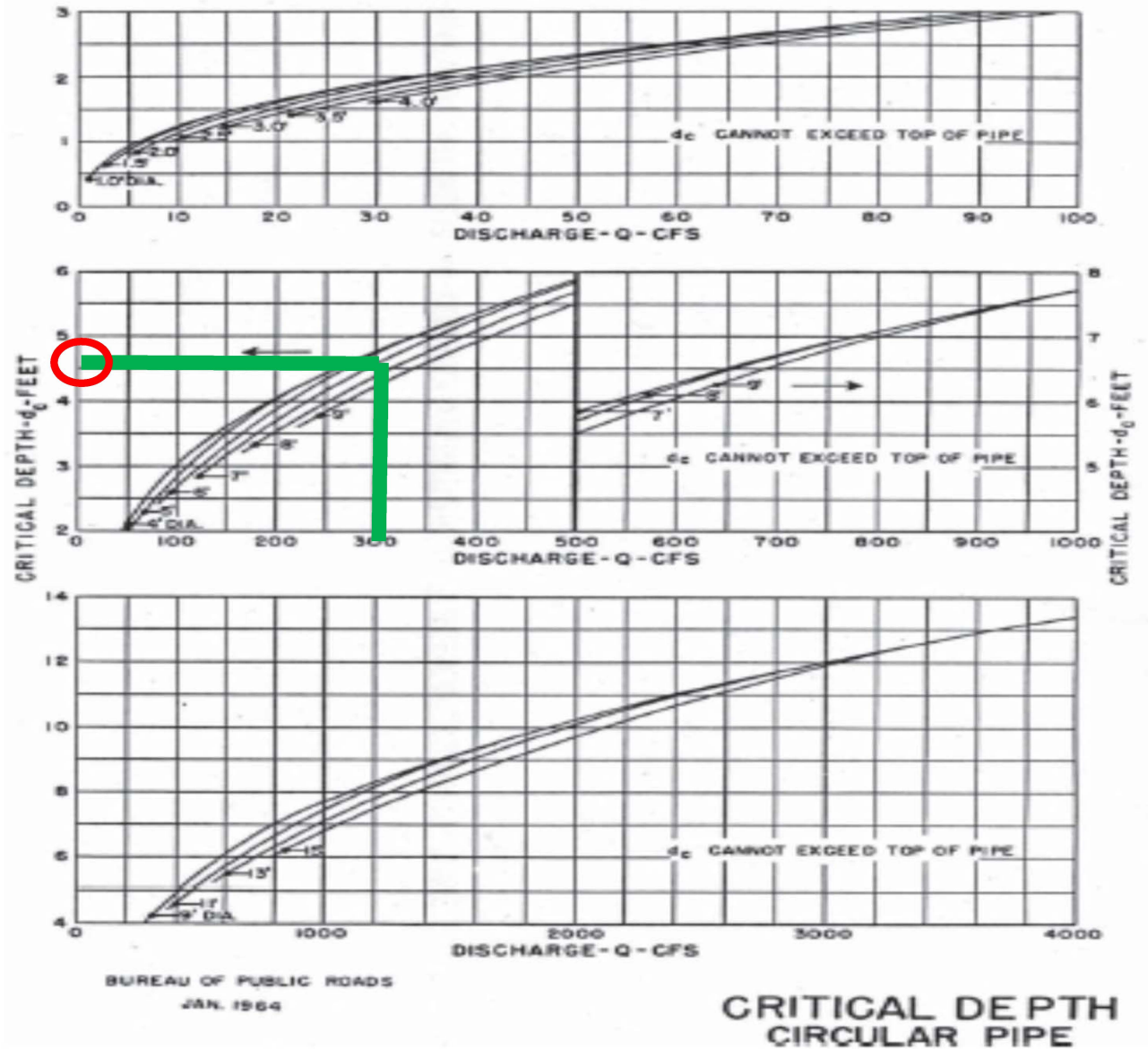
Summary and recommendations:

Culvert Hydraulic Calculations Form
Figure 3-3.6b
 (WSDOT Form 235-006)

Culvert Design Exercise 4

5. We are done with inlet calculations. Now we start on outlet calculations to determine what the HW is.
6. $K_e = "0.2"$ for a concrete pipe projecting from fill using HM Figure 3-3.4.5H
7. Use Figure 3-3.4.5I to determine the critical depth for a $Q = 300$ cfs and diameter = 7.0 feet. $D_c = "4.6$ feet"

For a flow of 300 cfs and Diameter of 7 feet, Critical Depth = 4.6 feet



Critical Depth for Circular Pipe

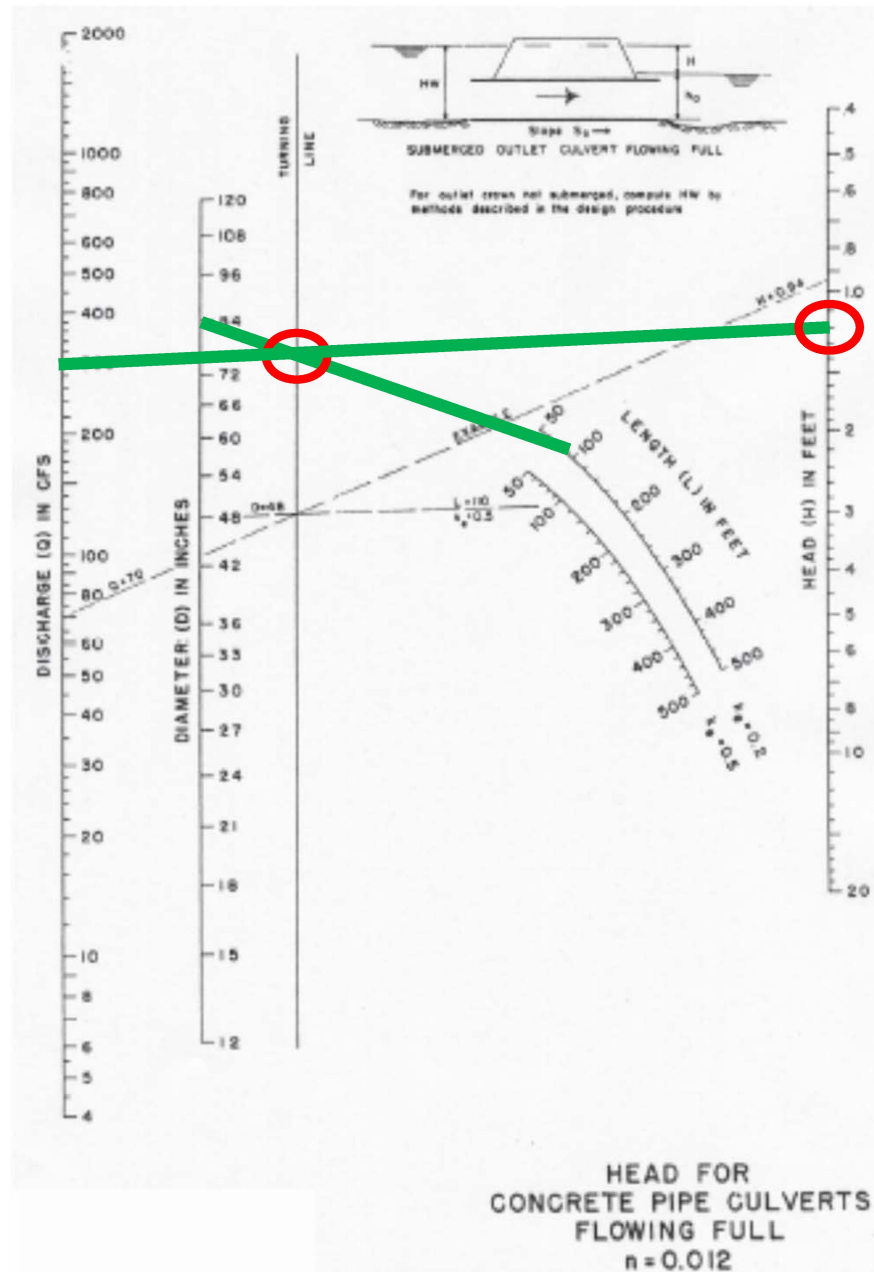
Figure 3-3.45I

Culvert Design Exercise 4

8. $(dc+D)/2 = (4.6+7)/2 = \text{"5.8 feet"}$
9. $H_o =$ the larger of $(dc+D)/2$ or the tailwater depth (5.0 feet in problem). So $h_o = \text{"5.8 feet"}$
10. H (headloss in barrel of pipe and losses at entrance and exit of pipe) = equation 3-4 or use Figure 3-3.4.5B outlet control nomograph for concrete pipe
 - a) Draw a line from 84 inch diameter pipe to the length = 100 on the K_e line = 0.2. this will give the cross point on the turning line.
 - b) From 300 cfs, draw a line through the cross point on the turning line to the "H" line

Culvert Design Exercise 4

c) This will give $H = "1.2"$



The outlet control nomograph shows a head of 1.2 feet

Culvert Design Exercise 4

11. $L \times S_o = 100 \times 0.005 = 0.5$ feet

12. HW for outlet control = equation 3-15 = $H + h_o - L \times S_o = 1.2 + 5.8 - 0.5 = \underline{6.5}$ feet

13. Cont. HW = controlling headwater = larger of the inlet headwater vs outlet headwater = “7.0” feet; culvert is operating under inlet control

14. To determine the outlet velocity under inlet control conditions, see HM 3-3.5.1. For outlet control, see HM 3-3.5.2.

15. Velocity = “13.2 feet/sec” using equation 3-9

Culvert Design Exercise 4

Culvert Design

For circular culverts, a simplified version of Manning's equation can be used to calculate the velocity in the culvert. The simplified equation for partial flow (10%-80%) is given by equation (3-9):

$$V_n = \frac{0.863 S^{0.366} Q^{0.268}}{D^{0.848} n^{0.732}} \quad (3-9)$$

Where: S = Pipe slope (ft/ft)

 Q = Flow rate (cfs)

 D = Pipe diameter (ft)

 N = Manning's roughness coefficient

 V_n = Normal velocity for partial flow (ft/s)

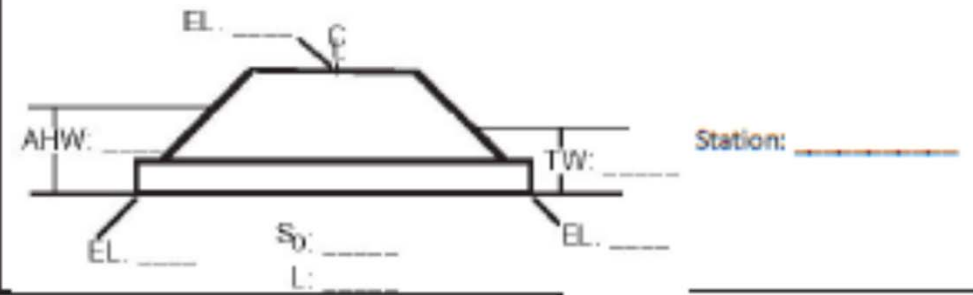
Project: _____
 SR: _____

Designer: _____
 Date: _____

Hydrologic and Channel Information

Q₁: _____ TW₁: _____
 Q₂: _____ TW₂: _____
 Q₃: _____ TW₃: _____

Sketch



Culvert Type	Q	Size	Headwater Computations										Cont. HW	Outlet Vel.	Comments	
			Inlet Control		Outlet Control											
			$\frac{HW}{D}$	HW	k_e	d_c	$\frac{d_c + D}{2}$	h_o	H	$L S_o$	HW					

Summary and recommendations:

Culvert Hydraulic Calculations Form
Figure 3-3.6b
 (WSDOT Form 235-006)

Culvert Design Exercise 4

16. Since the outlet velocity = 13.2 ft/sec, that is high per HM Figure 3-4.7.1 Outlet Protection Material Size; specify light loose riprap for outlet protection

Outlet Velocity (ft/sec)	Material
6-10 Quarry	Spalls
10-15	Light Loose Riprap
>15 Heavy	Loose Riprap

Designers should provide geotextile or filter material between any outlet material and the existing ground for soil stabilization. see section 4-6.3.2 for information.

Outlet Protection Material Size

Figure 3-4.7.1

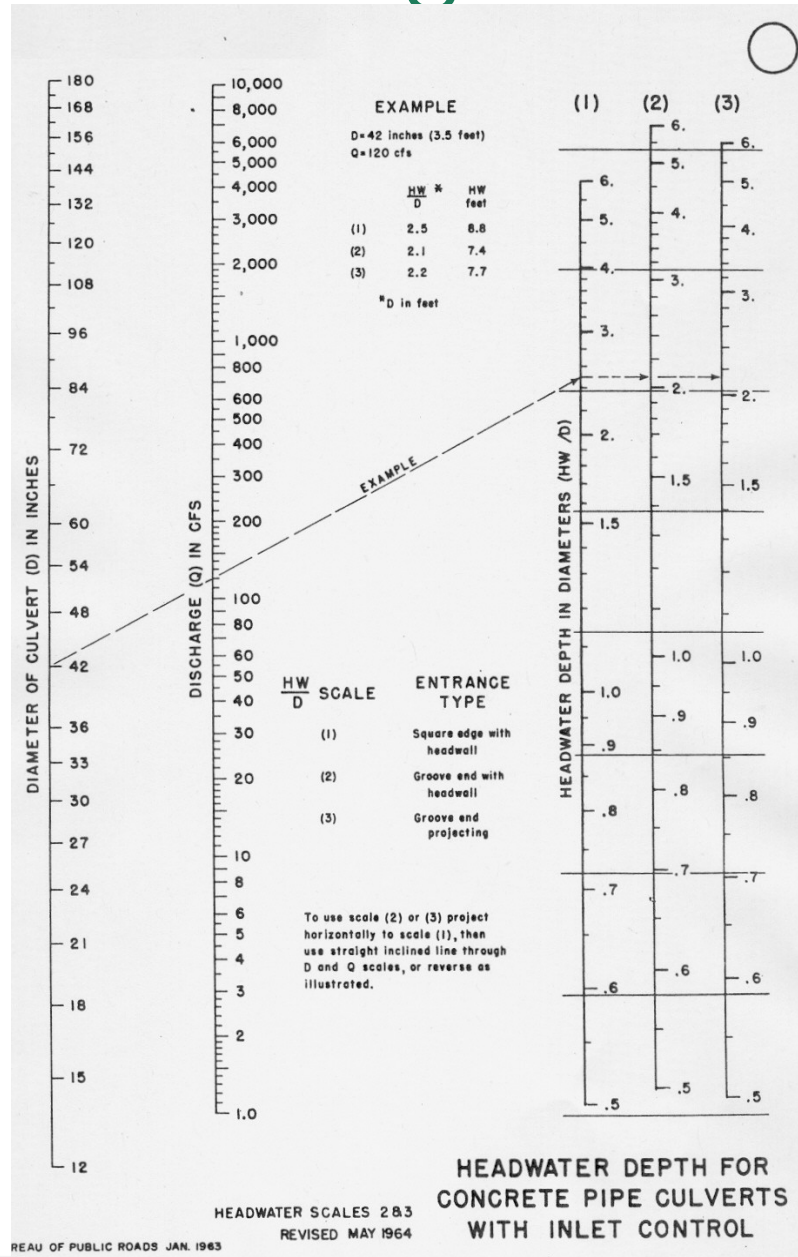
Culvert Design Exercise 4

We just finished calculations for the 25-year event. Next we want to repeat calculations for the 100-year flow $Q_{100} = 390$ cfs. First we will calculate the headwater for the inlet control case.

1. $HW/D = 1.18$ feet
2. HW inlet control = 8.2 feet

Culvert Design Exercise 4

Inlet control nomograph



Using an 84" diameter culvert, we get an HW/d of 1.18 at $Q_{100} = 390$ cfs

$$HW = 1.18 \times 7 = 8.2 \text{ feet}$$

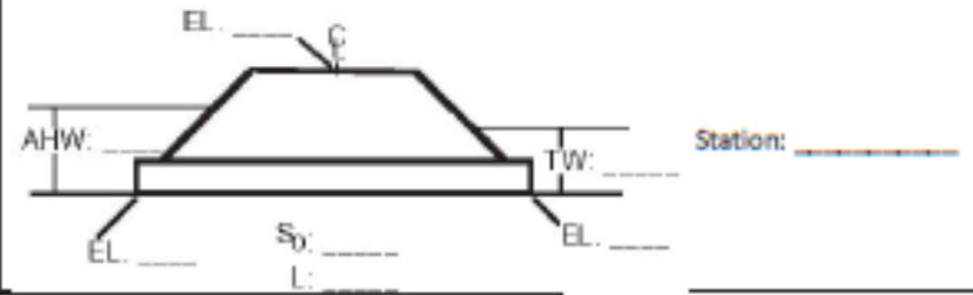
Project: _____
 SR: _____

Designer: _____
 Date: _____

Hydrologic and Channel Information

Q₁: _____ TW₁: _____
 Q₂: _____ TW₂: _____
 Q₃: _____ TW₃: _____

Sketch



Culvert Type	Q	Size	Headwater Computations										Cont. HW	Outlet Vel.	Comments
			Inlet Control		Outlet Control										
			$\frac{HW}{D}$	HW	k_e	d_c	$\frac{d_c + D}{2}$	h_o	H	$L S_o$	HW				

Summary and recommendations:

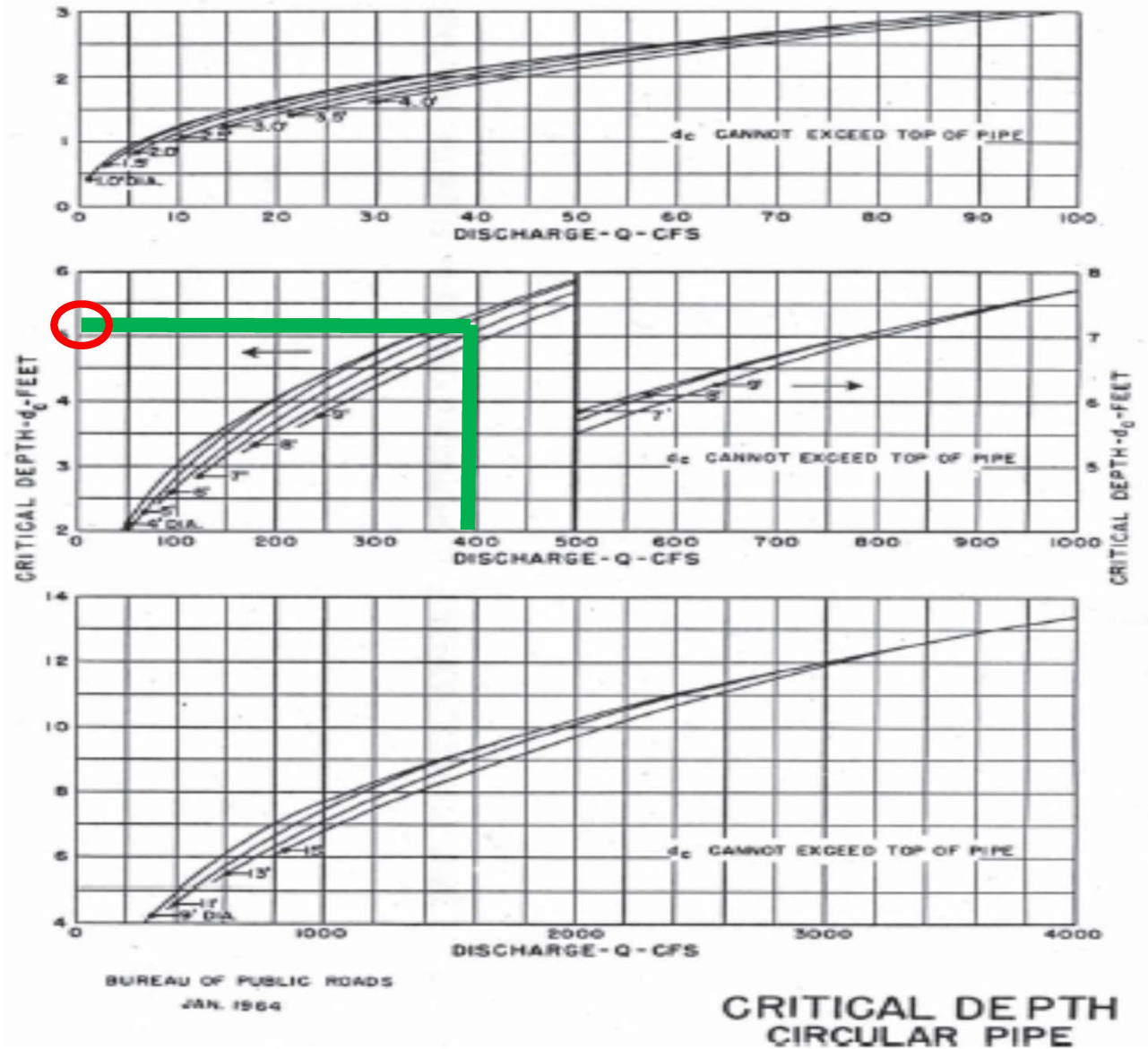
Culvert Hydraulic Calculations Form
Figure 3-3.6b
 (WSDOT Form 235-006)

Culvert Design Exercise 4

Now we need to calculate the headwater for the outlet control condition and compare it to the inlet control headwater. Whatever is higher is the controlling headwater.

3. $K_e = 0.2$, look up in HM Figure 3-3.4.5H
4. $d_c = 5.1$ feet

For a flow of 390 cfs and Diameter of 7 feet, Critical Depth = 5.1 feet



Critical Depth for Circular Pipe

Figure 3-3.45I

Culvert Design Exercise 4

5. $(d_c + D)/2 = (5.1 + 7)/2 = 6.05$ feet
6. H_o = the larger of $(d_c + D)/2$ or the tailwater depth (5.5 feet at the 100-year event in problem). So $h_o = "6.05$ feet"
7. Need to calculate the headloss H . We will use outlet control nomographs for this.

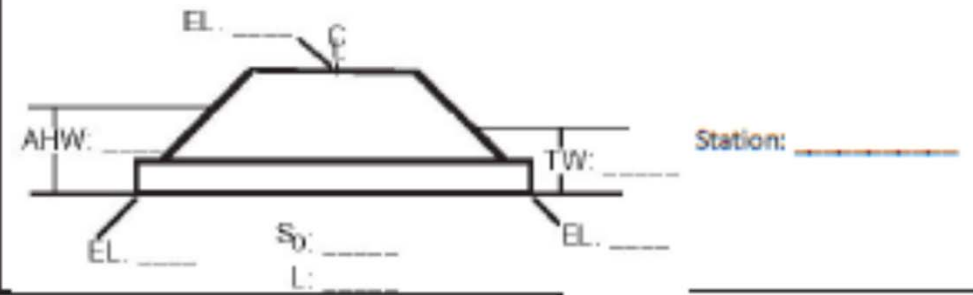
Project: _____
 SR: _____

Designer: _____
 Date: _____

Hydrologic and Channel Information

Q₁: _____ TW₁: _____
 Q₂: _____ TW₂: _____
 Q₃: _____ TW₃: _____

Sketch



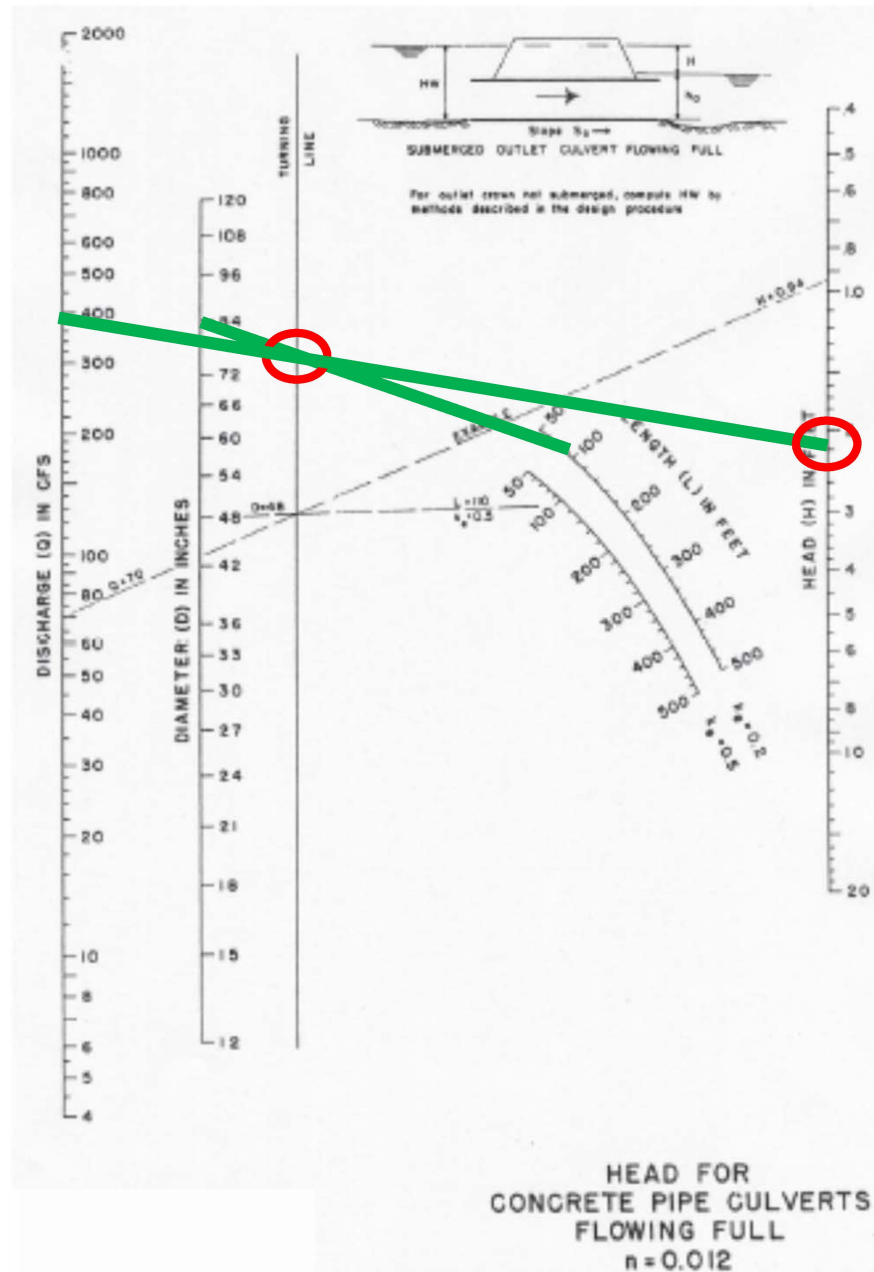
Culvert Type	Q	Size	Headwater Computations										Cont. HW	Outlet Vel.	Comments	
			Inlet Control		Outlet Control											
			$\frac{HW}{D}$	HW	k_e	d_c	$\frac{d_c + D}{2}$	h_o	H	$L S_o$	HW					

Summary and recommendations:

Culvert Hydraulic Calculations Form
Figure 3-3.6b
 (WSDOT Form 235-006)

Culvert Design Exercise 4

8. H (headloss in barrel of pipe and losses at entrance and exit of pipe) = equation 3-4 or use Figure 3-3.4.5B outlet control nomograph for concrete pipe
- a) Draw a line from 84 inch diameter pipe to the length = 100 feet on the K_e line = 0.2. this will give the cross point on the turning line.
 - b) From 390 cfs, draw a line through the cross point on the turning line to the “H” line



The outlet control nomograph shows a head of 2.2 feet

Culvert Design Exercise 4

9. $L \times S_o = 100 \times 0.005 = 0.5$ feet

10. HW for outlet control = equation 3-15 = $H + h_o - L \times S_o = 2.2 + 6.05 - 0.5 = \underline{7.75}$ feet

11. Cont. HW = controlling headwater = larger of the inlet headwater (8.2 feet) vs outlet headwater (7.75 feet) = “8.2” feet; culvert is operating under inlet control

12. To determine the outlet velocity under inlet control conditions, see HM 3-3.5.1. For outlet control, see HM 3-3.5.2.

13. Velocity = “14.1 feet/sec” using equation 3-9

Culvert Design Exercise 4

Culvert Design

For circular culverts, a simplified version of Manning's equation can be used to calculate the velocity in the culvert. The simplified equation for partial flow (10%-80%) is given by equation (3-9):

$$V_n = \frac{0.863 S^{0.366} Q^{0.268}}{D^{0.848} n^{0.732}} \quad (3-9)$$

Where: S = Pipe slope (ft/ft)

 Q = Flow rate (cfs)

 D = Pipe diameter (ft)

 N = Manning's roughness coefficient

 V_n = Normal velocity for partial flow (ft/s)

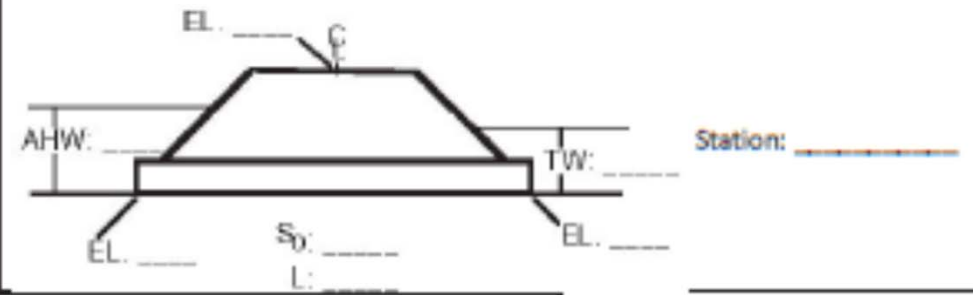
Project: _____
 SR: _____

Designer: _____
 Date: _____

Hydrologic and Channel Information

Q₁: _____ TW₁: _____
 Q₂: _____ TW₂: _____
 Q₃: _____ TW₃: _____

Sketch



Culvert Type	Q	Size	Headwater Computations										Cont. HW	Outlet Vel.	Comments	
			Inlet Control		Outlet Control											
			$\frac{HW}{D}$	HW	k_e	d_c	$\frac{d_c + D}{2}$	h_o	H	$L S_o$	HW					

Summary and recommendations:

Culvert Hydraulic Calculations Form
Figure 3-3.6b
 (WSDOT Form 235-006)

Culvert Design Exercise 4

14. Since the outlet velocity = 14.1 ft/sec, that is high per HM Figure 3-4.7.1 Outlet Protection Material Size; specify light loose riprap for outlet protection

Outlet Velocity (ft/sec)	Material
6-10 Quarry	Spalls
10-15	Light Loose Riprap
>15 Heavy	Loose Riprap

Designers should provide geotextile or filter material between any outlet material and the existing ground for soil stabilization. see section 4-6.3.2 for information.

Outlet Protection Material Size

Figure 3-4.7.1

Culvert Design Exercise 4

We have completed Exercise 4 Culvert Design